

Constable GD in CAPFs and SSF Rifleman GD in AR and Sepoy in NCB Examination 2025

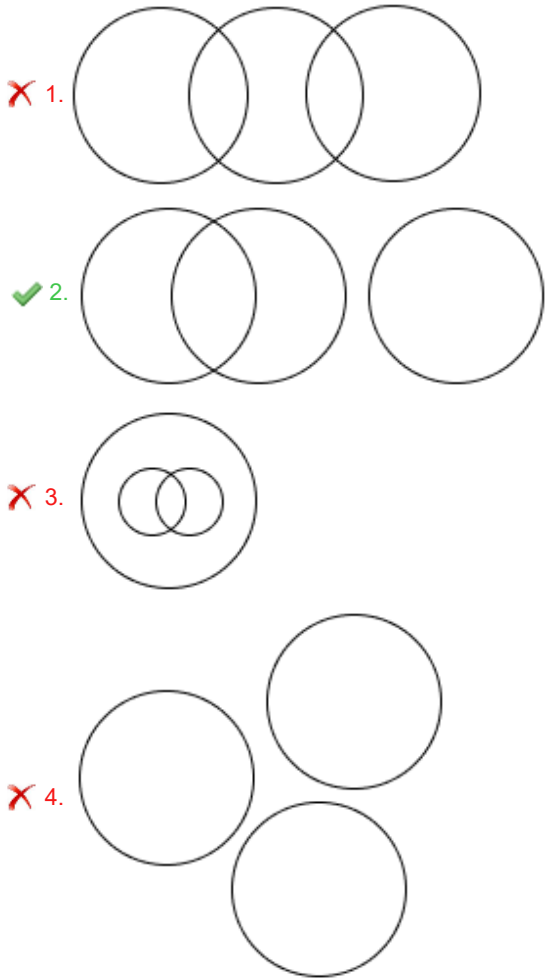
Exam Date	19/02/2025
Exam Time	12:00 PM - 1:00 PM
Subject	Constable GD Examination 2025

Section : Part-A-General Intelligence and Reasoning

Q.1 Select the Venn diagram that best illustrates the relationship between the following classes.

Doctors, Men, Tables

Ans



Q.2 RGLA is related to ODHW in a certain way based on the English alphabetical order. In the same way, CTZW is related to ZQVS. To which of the given options is NBUP related, following the same logic?

- Ans
- 1. HXPN
  - 2. GZRO
  - 3. HZPM
  - 4. KYQL

Q.3 G, H, I, J, K, L and M are sitting around a circular table, facing the centre of the table (but not necessarily in the same order). J sits third to the left of G. M sits second to the left of K. Only G sits between H and M. L is not an immediate neighbour of J. How many people sit between I and M when counted from the right of I?

- Ans
- 1. One
  - 2. Four
  - 3. Three
  - 4. Two

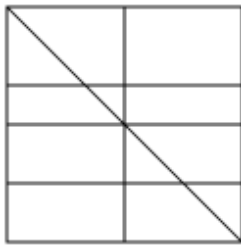
Q.4 Select the option figure in which the given figure (X) is embedded as its part (rotation is NOT allowed).



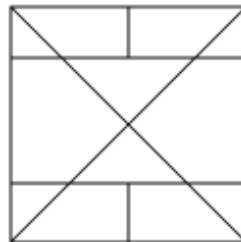
(X)

Ans

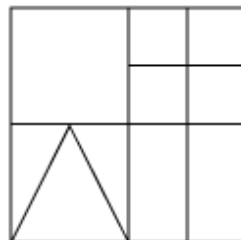
✗ 1.



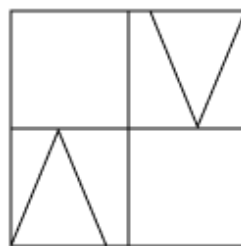
✗ 2.



✗ 3.



✓ 4.



Q.5 In a certain code language, 'PVQCB' is coded as '4' and 'MOZWITZ' is coded as '6'. What is the code for 'RPAW' in the given code language?

Ans ✓ 1. 3

✗ 2. 5

✗ 3. 6

✗ 4. 2

Q.6 Based on the English alphabetical order, three of the following four letter-clusters are alike in a certain way and thus form a group. Which letter-cluster DOES NOT belong to that group?  
(Note: The odd one out is not based on the number of consonants/vowels or their position in the letter-cluster.)

Ans ✗ 1. RWP

✗ 2. JOH

✗ 3. NSL

✓ 4. PUL

Q.7 A, B, C, D, E, F and G are sitting around a circular table facing the centre (but not necessarily in the same order) . A is sitting to the immediate right of F and the immediate left of C. G is sitting to the immediate right of C and the immediate left of E. D is sitting to the immediate left of F and the immediate right of B. Who is sitting to the immediate left of B?

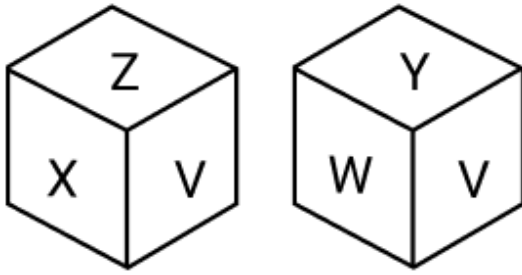
- Ans
- ☒ 1. E
  - ☐ 2. C
  - ☐ 3. G
  - ☐ 4. A

Q.8 What will come in the place of the question mark '?' in the following equation, if '-' and '÷' are interchanged and 'x' and '+' are interchanged?

$$40 + 24 - 6 \times 12 \div 3 = ?$$

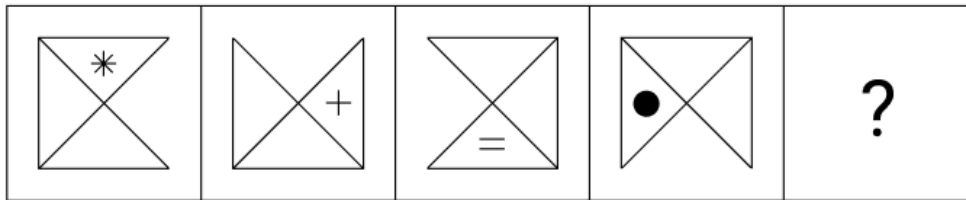
- Ans
- ☒ 1. 169
  - ☐ 2. 167
  - ☐ 3. 168
  - ☐ 4. 166

Q.9 A dice has its faces marked by letters U, V, W, X, Y and Z. Two different positions of the same dice are shown. Select the letter that will be on the face opposite to the one having U?



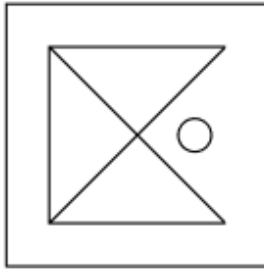
- Ans
- ☐ 1. X
  - ☐ 2. Y
  - ☐ 3. W
  - ☒ 4. V

Q.10 Select the figure from among the given options that can replace the question mark (?) in the following series.

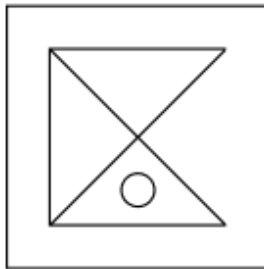


Ans

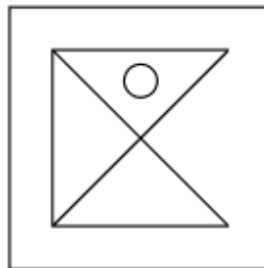
✗ 1.



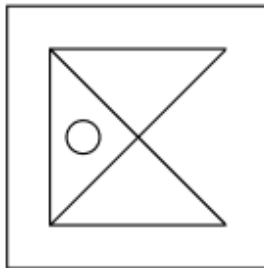
✗ 2.



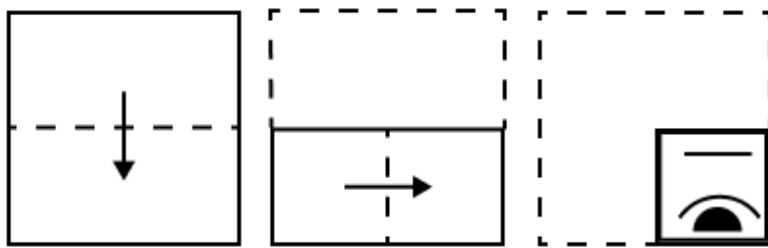
✓ 3.



✗ 4.



Q.11 A paper is folded and punched as shown below. How will it appear when unfolded?

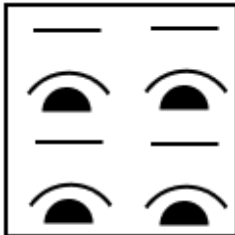


Ans

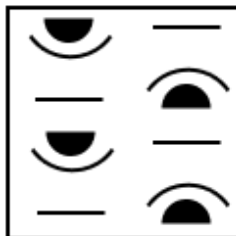
✓ 1.



✗ 2.



✗ 3.



✗ 4.



Q.12 Read the given statements and conclusions carefully. Assuming that the information given in the statements is true, even if it appears to be at variance with commonly known facts, decide which of the given conclusion(s) logically follow(s) from the statement(s).

Statements:

All slippers are knives.

Some knives are rats.

Some rats are pizzas.

Conclusions:

(I) Some pizzas are slippers.

(II) Some rats are slippers.

Ans ✗ 1. Only conclusion (I) follows.

✗ 2. Both conclusions (I) and (II) follow.

✗ 3. Only conclusion (II) follows.

✓ 4. Neither conclusion (I) nor (II) follows.

Q.13 What should come in place of the question mark (?) in the given series based on the English alphabetical order?

KAM LDN MGO NJP ?

- Ans
- ☐ 1. OPQ
  - ☐ 2. PQR
  - ☐ 3. PMQ
  - ☒ 4. OMQ

Q.14 In a certain code language,

'A + B' means 'A is the daughter of B',  
'A - B' means 'A is the brother of B',  
'A × B' means 'A is the wife of B' and  
'A ÷ B' means 'A is the father of B'.

Based on the above, how is P related to T if 'P × Q - R ÷ S + T'?

- Ans
- ☐ 1. Brother's wife
  - ☐ 2. Husband's brother's daughter
  - ☒ 3. Husband's brother's wife
  - ☐ 4. Brother's daughter

Q.15 LY 15 is related to JW 13 in a certain way. In the same way, DW 25 is related to BU 23. To which of the following is MR 35 related following the same logic?

- Ans
- ☐ 1. LQ 33
  - ☐ 2. OS 33
  - ☐ 3. NS 23
  - ☒ 4. KP 33

Q.16 Select the combination of letters that when sequentially placed in the blanks of the given series, will logically complete the series.

\_NRMQ\_OJNH\_GKEI\_HBF\_

- Ans
- ☐ 1. SKMDC
  - ☐ 2. SJMFC
  - ☐ 3. TJLFA
  - ☒ 4. TKLDA

Q.17 What should come in place of the question mark (?) in the given series?

87 91 94 98 101 ?

- Ans
- ☒ 1. 105
  - ☐ 2. 106
  - ☐ 3. 107
  - ☐ 4. 104

Q.18 In a certain code language, 'NANDA' is coded as '14-1-14-4-1' and 'GOPAL' is coded as '7-15-16-1-12'. How is 'BISWAS' coded in the given language?

- Ans
- ☐ 1. 2-9-19-20-1-19
  - ☐ 2. 2-9-19-21-1-19
  - ☐ 3. 2-9-19-22-1-19
  - ☒ 4. 2-9-19-23-1-19

**Q.19** The position(s) of how many letters will remain unchanged if each of the letters in the word CREATION is arranged in the English alphabetical order?

- Ans**
- ☐ 1. Two
  - ☐ 2. Four
  - ☐ 3. Three
  - ☒ 4. One

**Q.20** What should come in place of the question mark (?) in the given series?

990 1000 1011 1023 1036 ?

- Ans**
- ☐ 1. 1051
  - ☐ 2. 1049
  - ☐ 3. 1048
  - ☒ 4. 1050

Section : **Part-B-General Knowledge and General awareness**

**Q.1** Johann Wolfgang Dobereiner discovered that the properties of liquid Bromine lie between the properties of which gas and solid Iodine?

- Ans**
- ☐ 1. Helium
  - ☐ 2. Fluorine
  - ☒ 3. Chlorine
  - ☐ 4. Argon

**Q.2** Which religion has the largest population in Nepal?

- Ans**
- ☐ 1. Christianity
  - ☐ 2. Buddhism
  - ☐ 3. Islam
  - ☒ 4. Hinduism

**Q.3** Who has been appointed as Special Director General of Jammu and Kashmir Police in August 2024?

- Ans**
- ☐ 1. Ramesh Kumar
  - ☐ 2. B Srinivasan
  - ☐ 3. Suresh Hamadas
  - ☒ 4. Nalin Prabhat

**Q.4** How many Fundamental Duties were added by the 42nd Amendment Act, 1976 to the Indian Constitution?

- Ans**
- ☒ 1. 10
  - ☐ 2. 15
  - ☐ 3. 12
  - ☐ 4. 11

**Q.5** What is the drainage pattern of the rivers originating from the Northern Plains?

- Ans**
- ☐ 1. Radial
  - ☒ 2. Dendritic
  - ☐ 3. Centripetal
  - ☐ 4. Trellis

**Q.6** In the 2023-24 Union Budget of the Government of India, which scheme or package program was introduced to benefit traditional artisans and craftspeople?

- Ans**
- ☒ 1. PM VIKAS
  - ☐ 2. PM VISHWAS
  - ☐ 3. PM SHREE
  - ☐ 4. PM VIJET

**Q.7** The first winter games in Paralympics history played in Sweden happened in the year \_\_\_\_\_.

- Ans**
- ☐ 1. 1960
  - ☒ 2. 1976
  - ☐ 3. 1972
  - ☐ 4. 1964

**Q.8** The Maukharis were originally tributary rulers who later established an independent kingdom in which region?

- Ans**
- ☒ 1. Western Ganges plains
  - ☐ 2. Southern India
  - ☐ 3. Eastern Ganges plains
  - ☐ 4. Northern India

**Q.9** Xerophthalmia refers to the signs and symptoms of which sense organ related to vitamin A deficiency?

- Ans**
- ☐ 1. Ears
  - ☐ 2. Nose
  - ☒ 3. Eyes
  - ☐ 4. Tongue

**Q.10** Rattan Mohan Sharma is associated with which of the following musical gharanas?

- Ans**
- ☐ 1. Bhendibazaar gharana
  - ☐ 2. Agra gharana
  - ☒ 3. Mewati gharana
  - ☐ 4. Benaras gharana

**Q.11** The 'Poona Pact' of 1932 was an agreement between which two leaders?

- Ans**
- ☐ 1. Nehru and Jinnah
  - ☐ 2. Nehru and Ambedkar
  - ☒ 3. Gandhi and Ambedkar
  - ☐ 4. Gandhi and Jinnah

**Q.12** According to the Census of India, 2011, in which state was the lowest female literacy rate recorded?

- Ans**
- ☐ 1. West Bengal
  - ☒ 2. Bihar
  - ☐ 3. Jharkhand
  - ☐ 4. Odisha

**Q.13** On 8 July 2024, Prime Minister Narendra Modi began a high-profile visit to which of the following countries?

- Ans**
- ☒ 1. Russia
  - ☐ 2. Australia
  - ☐ 3. The USA
  - ☐ 4. The Maldives



**Q.14** In cricket, an over is \_\_\_\_\_ consecutive valid balls that are pitched by the bowler from one end of the pitch to the player (striker) at the other end of the pitch.

- Ans**
- ☐ 1. four
  - ☐ 2. five
  - ☒ 3. six
  - ☐ 4. seven

**Q.15** Bharati Shivaji, a recipient of the Sangeet Natak Akademi, the Sahitya Kala Parishad Samman and Padmashri by the Government of India, was associated with which of the following dance forms?

- Ans**
- ☒ 1. Mohiniyattam
  - ☐ 2. Kathakali
  - ☐ 3. Sattriya
  - ☐ 4. Kathak

**Q.16** Which of the following is the subtitle for the Twelfth Five-year Plan?

- Ans**
- ☐ 1. Food, Work and Productivity
  - ☐ 2. Growth with Social Justice and Equality
  - ☒ 3. Faster, More Inclusive and Sustainable Growth
  - ☐ 4. Attainment of Self-reliance

**Q.17** Which of the following is an example of a consumer good?

- Ans**
- ☐ 1. Equipment
  - ☐ 2. Machinery
  - ☐ 3. Tools
  - ☒ 4. Food grains

**Q.18** Villu Pattu, where performers narrate stories through songs with the villu or bow as the main instrument, is a folk dance of:

- Ans**
- ☐ 1. Jharkhand
  - ☐ 2. Telangana
  - ☐ 3. Gujarat
  - ☒ 4. Tamil Nadu

**Q.19** Who among the following decides on the questions of disqualifications of members of the State legislature in consultation with the Election Commission?

- Ans**
- ☐ 1. Chief Secretary
  - ☐ 2. Chief Minister
  - ☐ 3. Chairman of the Legislative Council
  - ☒ 4. Governor

**Q.20** Which of the following festivals is celebrated by the Monpas in Arunachal Pradesh?

- Ans**
- ☐ 1. Makaravilakku festival
  - ☐ 2. Gangaur Festival
  - ☒ 3. Losar Festival
  - ☐ 4. Losoong Festival

Q.1 In a fraction, the numerator is increased by 40% and the denominator is diminished by 20%. What fraction of the original is the new fraction?

- Ans
- ☐ 1.  $\frac{4}{7}$
  - ☐ 2.  $\frac{2}{5}$
  - ☐ 3.  $\frac{3}{4}$
  - ☒ 4.  $\frac{7}{4}$

Q.2 A motor car goes to a place at a speed of 23 km/h and returns at a speed of 33 km/h. The average speed (in km/h) of the motor car in the entire journey is:

- Ans
- ☒ 1.  $27\frac{3}{28}$
  - ☐ 2.  $29\frac{3}{31}$
  - ☐ 3.  $28\frac{2}{13}$
  - ☐ 4.  $30\frac{1}{12}$

Q.3 The smallest natural number which is divisible by 48, 72, 16 and 15 is:

- Ans
- ☐ 1. 751
  - ☒ 2. 720
  - ☐ 3. 710
  - ☐ 4. 784

Q.4 The LCM of 21, 24, 104 and 312 is:

- Ans
- ☒ 1. 2184
  - ☐ 2. 2253
  - ☐ 3. 2229
  - ☐ 4. 2149

Q.5 100 guavas were bought at ₹1210 per hundred and were sold at a profit of ₹965. Find the selling price (in ₹) per dozen of guavas.

- Ans
- ☐ 1. 256
  - ☐ 2. 266
  - ☒ 3. 261
  - ☐ 4. 271

Q.6 The population of a district is 335000, out of which 214000 are males. 31% of the population is literate. If 31% males are literate, then what percentage of females are literate?

- Ans
- ☒ 1. 31%
  - ☐ 2. 30%
  - ☐ 3. 33%
  - ☐ 4. 28%

Q.7 The fourth proportional to 2.5, 9.6 and 75 is:

- Ans
- ☐ 1. 212
  - ☒ 2. 288
  - ☐ 3. 198
  - ☐ 4. 232

Q.8 The fourth proportional to 16, a and 9a is 324. What is the value of a?

- Ans ☐ 1. 28  
☐ 2. 20  
☒ 3. 24  
☐ 4. 32

Q.9 When difference between compound and simple interest for three years is ₹217 at 10% interest per annum, the principal is ₹\_\_\_\_\_

- Ans ☐ 1. 7420  
☐ 2. 6425  
☐ 3. 8200  
☒ 4. 7000

Q.10 The average weight of Mohan, Mohammad and Ashish is 46 kg. If the average weight of Mohan and Mohammad be 39 kg and that of Mohammad and Ashish be 47 kg, then the weight of Mohammad (in kg) is:

- Ans ☐ 1. 44  
☐ 2. 49  
☐ 3. 54  
☒ 4. 34

Q.11 Veer has ₹1224 with him. He divided it amongst his sons Nitin and Pravin and asked them to invest it at 4% rate of interest compounded annually. It was seen that Nitin and Pravin got same amount after 19 and 20 years respectively. How much (in ₹) did Veer give to Pravin?

- Ans ☐ 1. 450  
☐ 2. 624  
☒ 3. 600  
☐ 4. 724

Q.12 Three-eighth of a journey is covered at a speed of 60 km/hr, and the remaining distance is covered at the rate of 40 km/hr. The average speed for the whole journey (in km/hr, rounded off to the nearest integer) is:

- Ans ☐ 1. 38  
☒ 2. 46  
☐ 3. 33  
☐ 4. 50

Q.13 The curved surface area of a sphere is  $9856 \text{ cm}^2$ , find its diameter in m.

- Ans ☐ 1. 2.8  
☐ 2. 0.28  
☐ 3. 5.6  
☒ 4. 0.56

Q.14 The cost price of 12 pens is equal to the selling price of 9 pens. Find the profit percentage.

- Ans ☐ 1. 21%  
☐ 2. 31%  
☒ 3.  $33\frac{1}{3}\%$   
☐ 4.  $27\frac{1}{4}\%$

**Q.15** The simple interest on a principal amount (in ₹) is ₹487 for a period of 2 years at the rate of 5% per annum. The principal amount (in ₹) is:

- Ans
- ☒ 1. 4870
  - ☐ 2. 4877
  - ☐ 3. 4861
  - ☐ 4. 4873

**Q.16** P, Q, R and S can complete a piece of work in 25 days, 30 days, 36 days and 40 days, respectively. They work on a rotation basis with Q working on the first day, S on the second day, P on the third day and R on the fourth day, then again Q on the fifth day and so on. In how much time will the work be completed?

- Ans
- ☐ 1.  $29\frac{4}{27}$  days
  - ☒ 2.  $31\frac{17}{25}$  days
  - ☐ 3.  $23\frac{11}{15}$  days
  - ☐ 4.  $26\frac{7}{30}$  days

**Q.17** Evaluate:  $(-9) - (-60) \div (-15) + (-2) \times 7$

- Ans
- ☒ 1. -27
  - ☐ 2. -29
  - ☐ 3. -30
  - ☐ 4. -26

**Q.18** An article is marked at ₹950. If it is sold at a discount of 20%, then the selling price becomes 2.5 times of its cost price. What is the cost price?

- Ans
- ☐ 1. ₹318
  - ☒ 2. ₹304
  - ☐ 3. ₹312
  - ☐ 4. ₹299

**Q.19** Evaluate:  $16 + 9 \div 3 - 3 \times 3$

- Ans
- ☐ 1. 13
  - ☒ 2. 10
  - ☐ 3. 9
  - ☐ 4. 12

**Q.20** Kamal travels from City A to City B. If Kamal drives his car at  $\frac{1}{4}$  of his normal speed, then he reaches City B 54 minutes late. Find the time (in minutes) that Kamal would have taken to travel from City A to City B if he drove at his normal speed.

- Ans
- ☐ 1. 13
  - ☐ 2. 23
  - ☐ 3. 10
  - ☒ 4. 18

**Q.1** Select the most appropriate option that can substitute the underlined segment in the given sentence.

Climate change, conflict, COVID-19 and economic crises are cut children off from their chance to thrive.

- Ans**
- ☐ 1. cutting child off
  - ☒ 2. cutting children off
  - ☐ 3. cuts children off
  - ☐ 4. cut children of

**Q.2** Select the most appropriate synonym for the given word.

Relinquish

- Ans**
- ☐ 1. Retain
  - ☐ 2. Hold
  - ☒ 3. Surrender
  - ☐ 4. Embrace

**Q.3** Select the sentence with an error in the adverb used.

- Ans**
- ☒ 1. The students completed the assignment less thorough than expected.
  - ☐ 2. He answered the questions surprisingly well during the interview.
  - ☐ 3. She performs her duties more diligently than anyone else in the team.
  - ☐ 4. The new software runs more efficiently than the previous version.

**Q.4** Select the most appropriate option to fill in the blank.

Despite the \_\_\_\_\_ challenges faced during the expedition, the team managed to reach their destination.

- Ans**
- ☐ 1. insignificant
  - ☐ 2. negligible
  - ☐ 3. trivial
  - ☒ 4. formidable

**Q.5** Select the most appropriate ANTONYM of the underlined word in the given sentence.

Let's distribute the surplus food to the needy.

- Ans**
- ☐ 1. Stale
  - ☐ 2. Huge
  - ☒ 3. Dearth
  - ☐ 4. Hot

**Q.6** Select the most appropriate ANTONYM of the bracketed word to fill in the blank.

The scent of freshly baked bread filled the bakery, \_\_\_\_\_ (sickening) customers to step inside.

- Ans**
- ☐ 1. pampering
  - ☐ 2. withdrawing
  - ☒ 3. enticing
  - ☐ 4. wakening

Q.7 Select the most appropriate synonym for the given word.

Dubious

- Ans
- ☐ 1. Clear
  - ☐ 2. Definite
  - ☒ 3. Doubtful
  - ☐ 4. Certain

Q.8 In the sentence, 'The scientist's explanation was extremely abstruse', what is a synonym of the word 'abstruse'?

- Ans
- ☒ 1. Complicated
  - ☐ 2. Obvious
  - ☐ 3. Clear
  - ☐ 4. Concise

Q.9 Select the word segment that can substitute and replace the bracketed word correctly and complete the sentence.

The toddler asked for more pieces of cake, but she wasn't given (more cake).

- Ans
- ☐ 1. two
  - ☐ 2. none
  - ☒ 3. any
  - ☐ 4. many

Q.10 Select the most appropriate option that can substitute the highlighted word segment in the given sentence. If the sentence is grammatically correct, select 'No correction'.

The manager of the hotel was giving orders when the incident occurred.

- Ans
- ☐ 1. gave
  - ☐ 2. has given
  - ☒ 3. No correction
  - ☐ 4. giving

Q.11 Identify the sentence with the INCORRECT usage of adverb.

- Ans
- ☐ 1. The novel written by Rahul was harshly critiqued by the readers.
  - ☐ 2. The presentation was well-organised and effectively delivered.
  - ☒ 3. Merry was aware of the implications more than her colleagues slightly.
  - ☐ 4. Marsh is an exceptionally talented musician with a bright future.

Q.12 Select the word that best completes the given sentence. Determine the collocation through the sentence.

The teacher, Sara, told us we must \_\_\_\_\_ arrangements for the upcoming conference.

- Ans
- ☐ 1. meet
  - ☐ 2. put
  - ☒ 3. make
  - ☐ 4. made

Q.13 Select the most appropriate idiom that can replace the underlined segment in the given sentence.

After suffering for a long time, Roy finally passed away this month.

- Ans
- ☒ 1. breathed his last
  - ☐ 2. burnt his boats
  - ☐ 3. blazed the trail
  - ☐ 4. brought down the house

**Q.14** Select the **INCORRECTLY** spelt word in the given sentence.

'Ramesh is extremely grateful to God for having survived the Pandemic.'

- Ans**
- ☒ 1. Greatful
  - ☐ 2. Pandemic
  - ☐ 3. Survived
  - ☐ 4. Extremely

**Q.15** Select the **INCORRECTLY** spelt word.

- Ans**
- ☒ 1. Quandery
  - ☐ 2. Contingency
  - ☐ 3. Sergeant
  - ☐ 4. Paradigm

**Comprehension:**

In the following passage, some words have been deleted. Read the passage carefully and select the most appropriate option to fill in each blank.

Aristotle (384–322 BCE), the disciple of Plato, is one of the most (1)\_\_\_\_\_ philosophers in history. Judged solely in terms of his (2)\_\_\_\_\_ influence, only Plato is his peer: Aristotle's works shaped centuries of philosophy from Late Antiquity through the Renaissance, and even today continue to be studied with keen, non-antiquarian interest. Aristotle was a (3)\_\_\_\_\_ researcher and writer, producing about two hundred treatises, though only thirty-one survive. His writings cover a vast range of (4)\_\_\_\_\_, including logic, metaphysics, ethics, political theory, aesthetics and rhetoric, as well as non-philosophical fields like biology, where he meticulously studied plants and animals. Aristotle's ideas have sparked (5)\_\_\_\_\_, inspired resistance and captivated readers for centuries.

**SubQuestion No : 16**

**Q.16** Select the most appropriate option to fill in blank number 1.

- Ans**
- ☐ 1. modern
  - ☐ 2. average
  - ☐ 3. unknown
  - ☒ 4. influential

**Comprehension:**

In the following passage, some words have been deleted. Read the passage carefully and select the most appropriate option to fill in each blank.

Aristotle (384–322 BCE), the disciple of Plato, is one of the most (1)\_\_\_\_\_ philosophers in history. Judged solely in terms of his (2)\_\_\_\_\_ influence, only Plato is his peer: Aristotle's works shaped centuries of philosophy from Late Antiquity through the Renaissance, and even today continue to be studied with keen, non-antiquarian interest. Aristotle was a (3)\_\_\_\_\_ researcher and writer, producing about two hundred treatises, though only thirty-one survive. His writings cover a vast range of (4)\_\_\_\_\_, including logic, metaphysics, ethics, political theory, aesthetics and rhetoric, as well as non-philosophical fields like biology, where he meticulously studied plants and animals. Aristotle's ideas have sparked (5)\_\_\_\_\_, inspired resistance and captivated readers for centuries.

**SubQuestion No : 17**

**Q.17** Select the most appropriate option to fill in blank number 2.

- Ans**
- ☐ 1. history
  - ☐ 2. modernity
  - ☐ 3. society
  - ☒ 4. philosophical

**Comprehension:**

In the following passage, some words have been deleted. Read the passage carefully and select the most appropriate option to fill in each blank.

Aristotle (384–322 BCE), the disciple of Plato, is one of the most (1)\_\_\_\_\_ philosophers in history. Judged solely in terms of his (2)\_\_\_\_\_ influence, only Plato is his peer: Aristotle's works shaped centuries of philosophy from Late Antiquity through the Renaissance, and even today continue to be studied with keen, non-antiquarian interest. Aristotle was a (3)\_\_\_\_\_ researcher and writer, producing about two hundred treatises, though only thirty-one survive. His writings cover a vast range of (4)\_\_\_\_\_, including logic, metaphysics, ethics, political theory, aesthetics and rhetoric, as well as non-philosophical fields like biology, where he meticulously studied plants and animals. Aristotle's ideas have sparked (5)\_\_\_\_\_, inspired resistance and captivated readers for centuries.

**SubQuestion No : 18**

**Q.18** Select the most appropriate option to fill in blank number 3.

- Ans**
- ☒ 1. reluctant
  - ☒ 2. prolific
  - ☒ 3. lazy
  - ☒ 4. hesitant

**Comprehension:**

In the following passage, some words have been deleted. Read the passage carefully and select the most appropriate option to fill in each blank.

Aristotle (384–322 BCE), the disciple of Plato, is one of the most (1)\_\_\_\_\_ philosophers in history. Judged solely in terms of his (2)\_\_\_\_\_ influence, only Plato is his peer: Aristotle's works shaped centuries of philosophy from Late Antiquity through the Renaissance, and even today continue to be studied with keen, non-antiquarian interest. Aristotle was a (3)\_\_\_\_\_ researcher and writer, producing about two hundred treatises, though only thirty-one survive. His writings cover a vast range of (4)\_\_\_\_\_, including logic, metaphysics, ethics, political theory, aesthetics and rhetoric, as well as non-philosophical fields like biology, where he meticulously studied plants and animals. Aristotle's ideas have sparked (5)\_\_\_\_\_, inspired resistance and captivated readers for centuries.

**SubQuestion No : 19**

**Q.19** Select the most appropriate option to fill in blank number 4.

- Ans**
- ☒ 1. characters
  - ☒ 2. books
  - ☒ 3. politics
  - ☒ 4. topics

**Comprehension:**

In the following passage, some words have been deleted. Read the passage carefully and select the most appropriate option to fill in each blank.

Aristotle (384–322 BCE), the disciple of Plato, is one of the most (1)\_\_\_\_\_ philosophers in history. Judged solely in terms of his (2)\_\_\_\_\_ influence, only Plato is his peer: Aristotle's works shaped centuries of philosophy from Late Antiquity through the Renaissance, and even today continue to be studied with keen, non-antiquarian interest. Aristotle was a (3)\_\_\_\_\_ researcher and writer, producing about two hundred treatises, though only thirty-one survive. His writings cover a vast range of (4)\_\_\_\_\_, including logic, metaphysics, ethics, political theory, aesthetics and rhetoric, as well as non-philosophical fields like biology, where he meticulously studied plants and animals. Aristotle's ideas have sparked (5)\_\_\_\_\_, inspired resistance and captivated readers for centuries.

**SubQuestion No : 20**

**Q.20** Select the most appropriate option to fill in blank number 5.

- Ans**
- ☒ 1. debates
  - ☒ 2. confuse
  - ☒ 3. criticise
  - ☒ 4. indifferent



Q.1 निम्न वाक्य में कौन - सा शब्द अशुद्ध है ?  
विक्रमादित्य अपने समय में कुसल और न्यायप्रिय शासक थे।

- Ans
- ☐ 1. न्यायप्रिय
  - ☐ 2. विक्रमादित्य
  - ☐ 3. शासक
  - ☒ 4. कुसल

Q.2 दिए गए वाक्य में शब्द या वाक्य खण्ड को बदलिए।

मैं आपका दर्शन करने आया हूँ।

- Ans
- ☐ 1. मैं सिर्फ आपका दर्शन करने आया हूँ।
  - ☐ 2. मैं आपका दर्शन करूँगा।
  - ☐ 3. मैं आपका दर्शन हेतु आया हूँ।
  - ☒ 4. मैं आपके दर्शन करने आया हूँ।

Q.3 'आकाश' का सही विलोम क्या होगा?

- Ans
- ☐ 1. गगन
  - ☒ 2. पाताल
  - ☐ 3. आसमान
  - ☐ 4. व्योम

Q.4 निम्नलिखित वाक्यांश हेतु सार्थक शब्द की पहचान करें।  
जो कभी नहीं आया हो

- Ans
- ☐ 1. अवगत
  - ☒ 2. अनागत
  - ☐ 3. दूरस्थ
  - ☐ 4. निरस्त

Q.5 निम्नलिखित में से किस वाक्य में संज्ञा शब्द का प्रयोग किया गया है-

- Ans
- ☒ 1. पश्चिम दिशा से आँधी चली।
  - ☐ 2. कल तक रुको।
  - ☐ 3. अंदर मत आना।
  - ☐ 4. तुम किसके साथ गए थे?

Q.6 'मुझे एक \_\_\_\_\_ गरम दूध पिला दो' वाक्य के रिक्त स्थान के लिए सर्वाधिक उपयुक्त देशज शब्द चुनिए-

- Ans
- ☐ 1. गिलास
  - ☐ 2. थरमस
  - ☐ 3. कप
  - ☒ 4. कटोरा

Q.7 दिए गए वाक्य में शब्द या वाक्य खण्ड को बदलिए।

हम अवश्य ही जाएँगे।

- Ans
- ☐ 1. हम तो अवश्य ही जाएँगे।
  - ☐ 2. हम तो अवश्यमेव जाएँगे।
  - ☐ 3. हम तो जाएँगे ही।
  - ☒ 4. हम तो अवश्य जाएँगे।

Q.8 निम्न में से 'यमुना' का पर्याय है

- Ans
- ☒ 1. सूर्यसुता
  - ☐ 2. देवनदी
  - ☐ 3. जनकतनया
  - ☐ 4. उदक

Q.9 निम्नलिखित में से 'देशज' शब्द युक्त विकल्प चुनकर वाक्य पूर्ण करें –  
'एक सुन्दर चिड़िया इस पेड़ की \_\_\_\_\_।'

- Ans
- ☒ 1. फुनगी पर बैठी है
  - ☐ 2. डाली पर बैठी है
  - ☐ 3. टहनी पर बैठी है
  - ☐ 4. शाखा पर बैठी है

Q.10 'ज्योत्सना' पर्याय है-

- Ans
- ☐ 1. चमक का
  - ☐ 2. सीता का
  - ☐ 3. बिजली का
  - ☒ 4. चाँदनी का

Q.11 'जो अपनी हत्या स्वयं कर ले' वाक्यांश के लिए उपयुक्त शब्द होगा-

- Ans
- ☐ 1. हत्यारा
  - ☐ 2. आत्मोत्सर्ग
  - ☐ 3. रक्तपिपासु
  - ☒ 4. आत्मघाती

Q.12 'इस \_\_\_\_\_ में लेखक का व्यक्तित्व प्रधान है और विषय गौण है।'

उपर्युक्त रिक्त स्थान के लिए कौन सा एकार्थी शब्द प्रयुक्त किया जाएगा?

- Ans
- ☐ 1. प्रबंध
  - ☒ 2. निबंध
  - ☐ 3. गद्य काव्य
  - ☐ 4. लेख

Q.13 'चिकना घड़ा होना' मुहावरे का सही अर्थ इनमें से क्या होगा?

- Ans
- ☐ 1. बिना पानी के रहना
  - ☒ 2. निर्लज्ज होना
  - ☐ 3. गुस्सा करना
  - ☐ 4. सर पर बाल नहीं होना

Q.14 निम्न में से किस वाक्य में कारक चिह्न का अशुद्ध प्रयोग हुआ है--

- Ans
- ☐ 1. मैंने उसे इशारा किया मगर वह बोलता ही चला गया।
  - ☒ 2. सैनिक के दुश्मन को देखा और गोलियाँ बरसाने लगा।
  - ☐ 3. आँधी ने अपना विकराल रूप धारण कर लिया।
  - ☐ 4. उसने देखा कि पूरा पुल बाढ़ में डूबा है।

Q.15 निम्नलिखित वाक्य के किस खंड में अशुद्धि है?

वृक्ष मे फल लगे हैं।

- Ans
- ☒ 1. मे
  - ☐ 2. फल
  - ☐ 3. लगे
  - ☐ 4. वृक्ष

**Comprehension:**

निम्नलिखित गद्यांश में से कुछ शब्द हटा दिए गए हैं। दिए गए विकल्पों की सहायता से रिक्त स्थानों की पूर्ति कीजिए। प्रत्येक संख्या के लिए उपयुक्त विकल्प का चयन कीजिए  
भक्ति-काव्य के अंतर्गत उपालंभ काव्य का प्रमुख आधार \_\_\_\_\_(1) का मथुरा प्रवास है। कृष्ण \_\_\_\_\_(2) छोड़कर मथुरा जाते हैं। गोप-गोपियाँ, नंद, यशोदा, ग्वाल-बाल सभी उनके \_\_\_\_\_(3) में व्यथित हो जाते हैं। कृष्ण के वापस आने की \_\_\_\_\_(4) जब धीरे-धीरे नष्ट हो जाती है तब उनकी आकुलता अधिक बढ़ जाती है। अंततः गोपियों की वियोग-वेदना उपालंभ के रूप में \_\_\_\_\_(5) होती है।

**SubQuestion No : 16**

Q.16 सर्वोचित शब्द से गद्यांश का प्रथम रिक्त स्थान पूर्ण करें-

- Ans
- ☒ 1. कृष्ण
  - ☐ 2. शिव
  - ☐ 3. राम
  - ☐ 4. नारद

**Comprehension:**

निम्नलिखित गद्यांश में से कुछ शब्द हटा दिए गए हैं। दिए गए विकल्पों की सहायता से रिक्त स्थानों की पूर्ति कीजिए। प्रत्येक संख्या के लिए उपयुक्त विकल्प का चयन कीजिए  
भक्ति-काव्य के अंतर्गत उपालंभ काव्य का प्रमुख आधार \_\_\_\_\_(1) का मथुरा प्रवास है। कृष्ण \_\_\_\_\_(2) छोड़कर मथुरा जाते हैं। गोप-गोपियाँ, नंद, यशोदा, ग्वाल-बाल सभी उनके \_\_\_\_\_(3) में व्यथित हो जाते हैं। कृष्ण के वापस आने की \_\_\_\_\_(4) जब धीरे-धीरे नष्ट हो जाती है तब उनकी आकुलता अधिक बढ़ जाती है। अंततः गोपियों की वियोग-वेदना उपालंभ के रूप में \_\_\_\_\_(5) होती है।

**SubQuestion No : 17**

Q.17 सर्वोचित शब्द से गद्यांश का द्वितीय रिक्त स्थान पूर्ण करें-

- Ans
- ☐ 1. द्वारिका
  - ☐ 2. काशी
  - ☒ 3. गोकुल
  - ☐ 4. अयोध्या

**Comprehension:**

निम्नलिखित गद्यांश में से कुछ शब्द हटा दिए गए हैं। दिए गए विकल्पों की सहायता से रिक्त स्थानों की पूर्ति कीजिए। प्रत्येक संख्या के लिए उपयुक्त विकल्प का चयन कीजिए  
भक्ति-काव्य के अंतर्गत उपालंभ काव्य का प्रमुख आधार \_\_\_\_\_(1) का मथुरा प्रवास है। कृष्ण \_\_\_\_\_(2) छोड़कर मथुरा जाते हैं। गोप-गोपियाँ, नंद, यशोदा, ग्वाल-बाल सभी उनके \_\_\_\_\_(3) में व्यथित हो जाते हैं। कृष्ण के वापस आने की \_\_\_\_\_(4) जब धीरे-धीरे नष्ट हो जाती है तब उनकी आकुलता अधिक बढ़ जाती है। अंततः गोपियों की वियोग-वेदना उपालंभ के रूप में \_\_\_\_\_(5) होती है।

**SubQuestion No : 18**

Q.18 सर्वोचित शब्द से गद्यांश का तृतीय रिक्त स्थान पूर्ण करें-

- Ans
- ☐ 1. संयोग
  - ☐ 2. अनुपस्थिति
  - ☐ 3. अभाव
  - ☒ 4. वियोग

**Comprehension:**

निम्नलिखित गद्यांश में से कुछ शब्द हटा दिए गए हैं। दिए गए विकल्पों की सहायता से रिक्त स्थानों की पूर्ति कीजिए। प्रत्येक संख्या के लिए उपयुक्त विकल्प का चयन कीजिए

भक्ति-काव्य के अंतर्गत उपालंभ काव्य का प्रमुख आधार \_\_\_\_\_ (1) का मथुरा प्रवास है। कृष्ण \_\_\_\_\_ (2) छोड़कर मथुरा जाते हैं। गोप-गोपियाँ, नंद, यशोदा, ग्वाल-बाल सभी उनके \_\_\_\_\_ (3) में व्यथित हो जाते हैं। कृष्ण के वापस आने की \_\_\_\_\_ (4) जब धीरे-धीरे नष्ट हो जाती है तब उनकी आकुलता अधिक बढ़ जाती है। अंततः गोपियों की वियोग-वेदना उपालंभ के रूप में \_\_\_\_\_ (5) होती है।

**SubQuestion No : 19**

**Q.19** सर्वोचित शब्द से गद्यांश का चतुर्थ रिक्त स्थान पूर्ण करें-

- Ans**
- ☒ 1. इच्छा
  - ☒ 2. आशा
  - ☒ 3. आशंका
  - ☒ 4. निराशा

**Comprehension:**

निम्नलिखित गद्यांश में से कुछ शब्द हटा दिए गए हैं। दिए गए विकल्पों की सहायता से रिक्त स्थानों की पूर्ति कीजिए। प्रत्येक संख्या के लिए उपयुक्त विकल्प का चयन कीजिए

भक्ति-काव्य के अंतर्गत उपालंभ काव्य का प्रमुख आधार \_\_\_\_\_ (1) का मथुरा प्रवास है। कृष्ण \_\_\_\_\_ (2) छोड़कर मथुरा जाते हैं। गोप-गोपियाँ, नंद, यशोदा, ग्वाल-बाल सभी उनके \_\_\_\_\_ (3) में व्यथित हो जाते हैं। कृष्ण के वापस आने की \_\_\_\_\_ (4) जब धीरे-धीरे नष्ट हो जाती है तब उनकी आकुलता अधिक बढ़ जाती है। अंततः गोपियों की वियोग-वेदना उपालंभ के रूप में \_\_\_\_\_ (5) होती है।

**SubQuestion No : 20**

**Q.20** सर्वोचित शब्द से गद्यांश का पंचम रिक्त स्थान पूर्ण करें-

- Ans**
- ☒ 1. प्रस्तुत
  - ☒ 2. व्यक्त
  - ☒ 3. अनुमानित
  - ☒ 4. अनुभव