

# Constable GD in CAPFs and SSF Rifleman GD in AR and Sepoy in NCB Examination 2025

Exam Date	20/02/2025
Exam Time	12:00 PM - 1:00 PM
Subject	Constable GD Examination 2025

## Section : Part-A-General Intelligence and Reasoning

**Q.1** Six people A, B, C, R, S and T are sitting around a circular table facing the centre (but not necessarily in the same order) . Only three people sit between A and S when counted from the right of S. Only two people sit between A and B. R sits to the immediate right of C. How many people sit between T and A when counted from the left of A?

- Ans**
- ☒ 1. Four
  - ☐ 2. Three
  - ☐ 3. One
  - ☐ 4. Two

**Q.2** What should come in place of the question mark (?) in the given series?

450 451 454 459 466 ?

- Ans**
- ☐ 1. 477
  - ☒ 2. 475
  - ☐ 3. 476
  - ☐ 4. 473

**Q.3** In a certain code language, 'XHOS' is coded as '84' and 'CRFY' is coded as '112'. What is the code for 'ZIOE' in the given language?

- Ans**
- ☐ 1. 110
  - ☒ 2. 106
  - ☐ 3. 98
  - ☐ 4. 92

**Q.4** In a certain code language, 'PAIR' is coded as '7643' and 'REAP' is coded as '7536'. How is 'E' coded in the given language?

- Ans**
- ☐ 1. 4
  - ☐ 2. 6
  - ☐ 3. 7
  - ☒ 4. 5

**Q.5** Read the given statements and conclusions carefully. Assuming that the information given in the statements is true, even if it appears to be at variance with commonly known facts, decide which of the given conclusions logically follow(s) from the statements.

**Statements:**

All pianists are musicians.

All musicians are singers.

No singer is a composer.

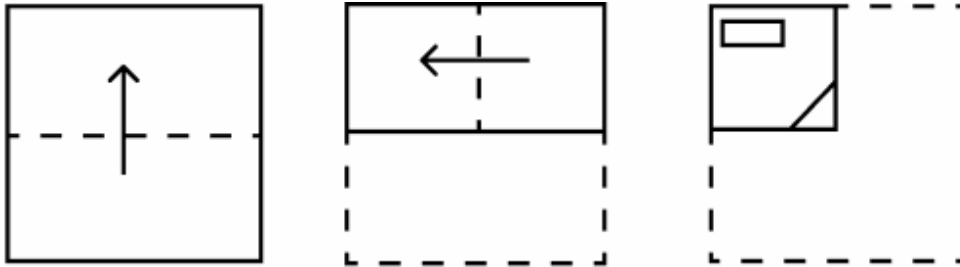
**Conclusions:**

(I): No pianist is a composer.

(II): Some singers are pianists.

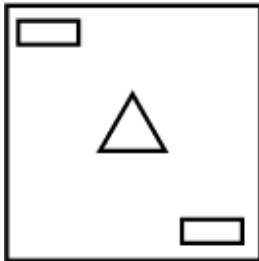
- Ans**
- ☐ 1. Neither conclusion (I) nor (II) follows.
  - ☒ 2. Both conclusions (I) and (II) follow.
  - ☐ 3. Only conclusion (II) follows.
  - ☐ 4. Only conclusion (I) follows.

Q.6 The sequence of folding a piece of paper and the manner in which the folded paper is cut is shown in the following figures. How would this paper look when unfolded?

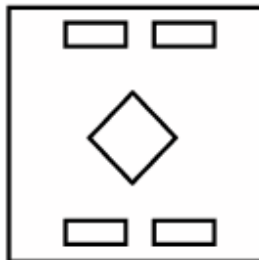


Ans

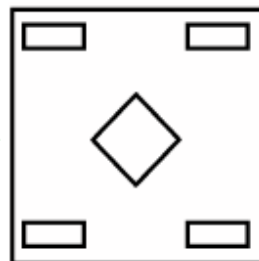
✗ 1.



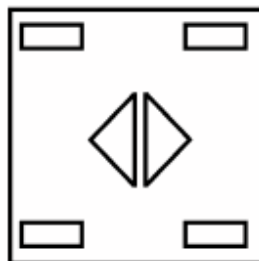
✗ 2.



✓ 3.



✗ 4.



Q.7 Based on the English alphabetical order, three of the following four letter-clusters are alike in a certain way and thus form a group. Which is the one that DOES NOT belong to that group?

(Note: The odd one out is not based on the number of consonants/vowels or their position in the letter-cluster.)

Ans ✗ 1. UVQ

✓ 2. IMH

✗ 3. WXS

✗ 4. IJE

Q.8 Select the option that represents the letters that, when sequentially placed from left to right in the blanks below, will complete the letter series.

\_ \_ T B \_ N A \_ B M \_ A

Ans ✓ 1. NAMTN

✗ 2. TAMNA

✗ 3. MTANN

✗ 4. NTMAN

Q.9 In a certain code language,  
'A ! B' means 'A is the brother of B',  
'A < B' means 'A is the son of B',  
'A / B' means 'A is the father of B' and  
'A : B' means 'A is the wife of B'.

How is P related to A if 'P < B ! S : T / A'?

- Ans
- ☐ 1. Mother's sister's sister
  - ☐ 2. Mother's father
  - ☒ 3. Mother's brother's son
  - ☐ 4. Mother's sister's brother

Q.10 Seven people, A, B, L, M, N, S and T, are sitting in a row, facing north (but not necessarily in the same order).  
Only three people sit to the left of T. Only B sits to the right of A. Only three people sit between A and S. L sits at some place to the left of N but at some place to the right of M.  
How many people sit between M and N?

- Ans
- ☒ 1. Three
  - ☐ 2. One
  - ☐ 3. Four
  - ☐ 4. Two

Q.11 SHMA is related to PJOX in a certain way based on the English alphabetical order. In the same way, RBUX is related to ODWU. To which of the given options is NCTV related, following the same logic?

- Ans
- ☐ 1. JFVU
  - ☒ 2. KEVS
  - ☐ 3. LDWT
  - ☐ 4. LEWS

Q.12 What should come in place of the question mark (?) in the given series based on the English alphabetical order?

ATE VOZ QJU LEP ?

- Ans
- ☐ 1. HZK
  - ☒ 2. GZK
  - ☐ 3. GYK
  - ☐ 4. GZL

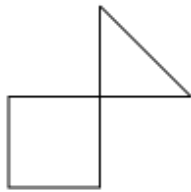
Q.13 The position(s) of how many letters will remain unchanged if each letter in the word CLIMBER is arranged in the English alphabetical order?

- Ans
- ☐ 1. Two
  - ☐ 2. None
  - ☐ 3. Three
  - ☒ 4. One

Q.14 'PWGZ' is related to 'RZIC' in a certain way based on the English alphabetical order. In the same way, 'UELO' is related to 'WHNR'. To which of the following is 'JDVB' related, following the same logic?

- Ans
- ☐ 1. NFWD
  - ☐ 2. NFXD
  - ☒ 3. LGXE
  - ☐ 4. MHYF

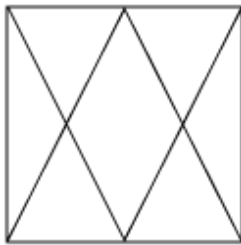
Q.15 Select the option figure in which the given figure (X) is embedded as its part (rotation NOT allowed).



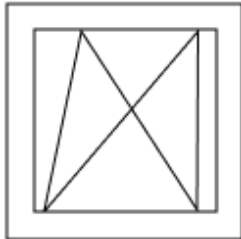
(X)

Ans

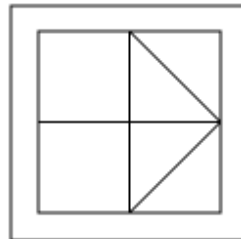
✗ 1.



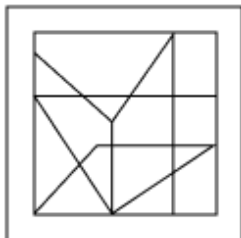
✗ 2.



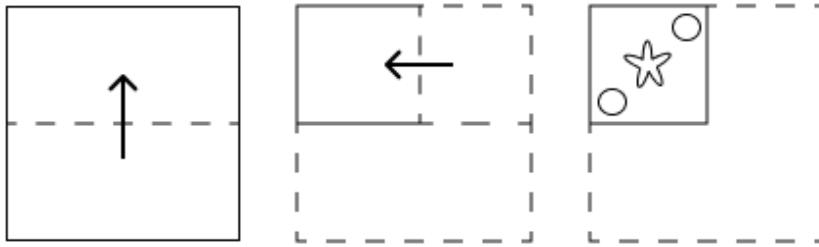
✓ 3.



✗ 4.

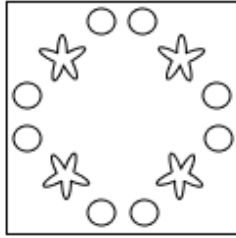


Q.16 The sequence of folding a piece of paper and the manner in which the folded paper is cut is shown in the following figures. How would this paper look when unfolded?

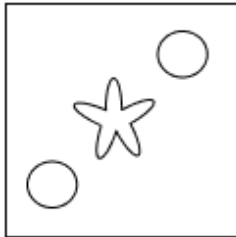


Ans

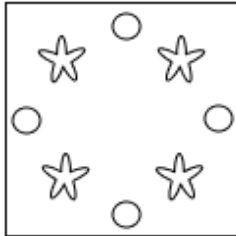
✓ 1.



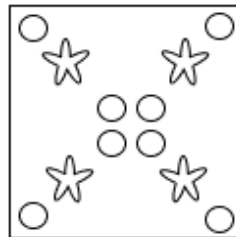
✗ 2.



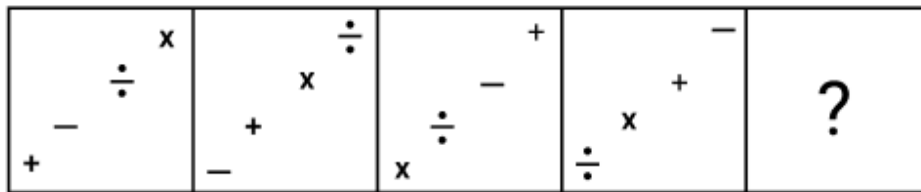
✗ 3.



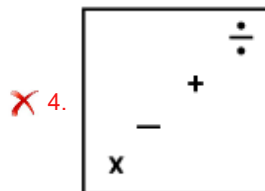
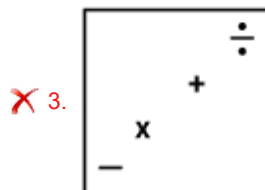
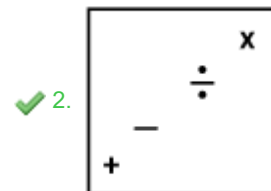
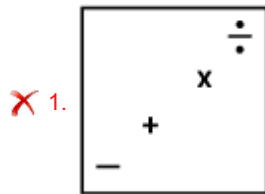
✗ 4.



Q.17 Identify the figure given in the options which when put in place of the question mark (?) will logically complete the series.



Ans



Q.18 What will come in the place of the question mark '?' in the following equation, if '-' and '÷' are interchanged and 'x' and '+' are interchanged?

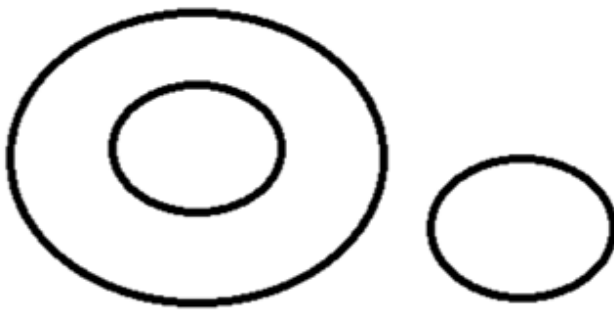
$$32 + 49 - 7 \times 4 \div 3 = ?$$

- Ans
- ✓ 1. 225
  - ✗ 2. 228
  - ✗ 3. 227
  - ✗ 4. 226


Q.19 Which of the following Venn diagrams indicates the best relation between Food, Bread and Wool?

Ans

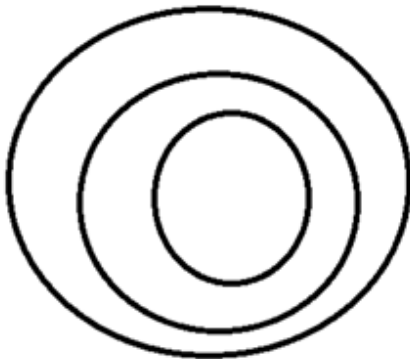
✓ 1.



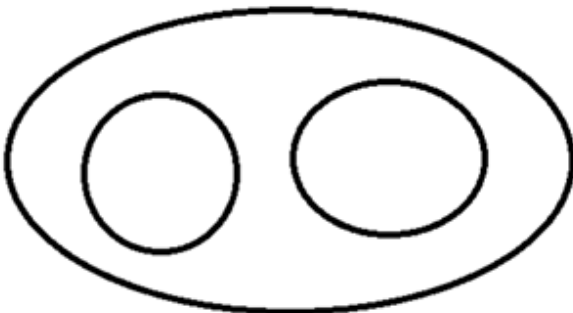
✗ 2.



✗ 3.



✗ 4.



Q.20 What should come in place of the question mark (?) in the given series?

36 40 48 64 96 ?

Ans

✗ 1. 126

✗ 2. 148

✗ 3. 134

✓ 4. 160

**Q.1** The film RRR was bestowed with the esteemed Golden Globe award in the category of 'Best Original Song' for the composition 'Natu Natu'. Who are the singers of this song?

- Ans**
- ☐ 1. Vineeth Sreenivasan and Anirudh Ravichander
  - ☐ 2. TM Soundararajan and Vijay
  - ☒ 3. Rahul Sipligunj and Kalabhairava
  - ☐ 4. Rajesh Krishnan and Silambarasan TR

**Q.2** How many Fundamental Duties are there for citizens of India?

- Ans**
- ☐ 1. 8
  - ☐ 2. 6
  - ☐ 3. 10
  - ☒ 4. 11

**Q.3** As per the official NBA rules, each basket ring shall be securely attached to the backboard with its upper edge \_\_\_\_\_ above and parallel to the floor and equidistant from the vertical edges of the board.

- Ans**
- ☐ 1. 12'
  - ☒ 2. 10'
  - ☐ 3. 13'
  - ☐ 4. 11'

**Q.4** In which year was the Indian Press Act, a law that granted the government extensive powers to control the press in India, passed?

- Ans**
- ☒ 1. 1910
  - ☐ 2. 1911
  - ☐ 3. 1912
  - ☐ 4. 1913

**Q.5** In ancient times, who among the following categorically mentioned that 'there are 360 bones in a human body'?

- Ans**
- ☒ 1. Charaka
  - ☐ 2. Shudaraka
  - ☐ 3. Patanjali
  - ☐ 4. Chanakya

**Q.6** Which of the following is the role of micro finance institutions?

- Ans**
- ☐ 1. Offering financial services to the high-income group
  - ☐ 2. Offering financial services to small financial institutions
  - ☐ 3. Offering financial services to foreigners
  - ☒ 4. Offering financial services to the low-income group

**Q.7** Who assumed the role of the Election Commissioner in the Election Commission of India on 15 March 2024?

- Ans**
- ☒ 1. Sukhbir Singh Sandhu
  - ☐ 2. Ravi Methuen
  - ☐ 3. Manoj K Keshav
  - ☐ 4. Meera Ravindran

**Q.8** Which of the following was an objective of the Five-Year Plans in India?

- Ans**
- ☐ 1. Self-achievable
  - ☒ 2. Self-reliance
  - ☐ 3. Self-confidence
  - ☐ 4. Self-motivation



**Q.9** According to the Indian Constitution, which of the following is the final authority in the interpretation of the Constitution?

- Ans**
- ☐ 1. Lok Sabha
  - ☒ 2. Supreme Court
  - ☐ 3. Parliament
  - ☐ 4. President

**Q.10** Which functional group is polar, containing an unsymmetrical distribution of charge between oxygen and hydrogen atoms?

- Ans**
- ☐ 1. Ethers
  - ☒ 2. Alcohols
  - ☐ 3. Carboxylic acids
  - ☐ 4. Esters

**Q.11** The Swachh Bharat Abhiyaan is celebrated on which Indian National festival?

- Ans**
- ☐ 1. New Year
  - ☐ 2. Republic Day
  - ☐ 3. Independence Day
  - ☒ 4. Gandhi Jayanti

**Q.12** How many events are played in Olympic badminton?

- Ans**
- ☒ 1. 5
  - ☐ 2. 6
  - ☐ 3. 3
  - ☐ 4. 7

**Q.13** In which year did the Films Division of the Ministry of Information and Broadcasting organise the first part of 'Nrityanjali', an online film festival on Indian Classical Dance and Maestros?

- Ans**
- ☐ 1. 2012
  - ☐ 2. 2024
  - ☐ 3. 2001
  - ☒ 4. 2020

**Q.14** The Harry Messel Award was given to Bibhab Kumar Talukdar for his conservation leadership in October 2024 by the \_\_\_\_\_.

- Ans**
- ☒ 1. Species Survival Commission
  - ☐ 2. Biodiversity Observation Commission
  - ☐ 3. Species Observational Commission
  - ☐ 4. Animal Survival Commission

**Q.15** During which Five-Year Plan did India face the challenge of the influx of Bangladeshi refugees?

- Ans**
- ☐ 1. Sixth Plan
  - ☐ 2. Fifth Plan
  - ☐ 3. Second Plan
  - ☒ 4. Fourth Plan

**Q.16** According to Census 2011, which of the following districts has the least sex ratio?

- Ans**
- ☐ 1. Chandigarh
  - ☐ 2. Surat
  - ☐ 3. Kargil
  - ☒ 4. Daman

**Q.17** Which is the Indian labour law and social security measure that aims to guarantee the 'right to work'?

- Ans**
- ☐ 1. Employees' Provident Funds and Miscellaneous Provisions Act
  - ☒ 2. Mahatma Gandhi National Rural Employment Guarantee Act
  - ☐ 3. Citizenship Act
  - ☐ 4. Indian Institutes of Management Act

**Q.18** Sarayu Sai was given the Natya Kalajyoti Award in 2006 for which dance style?

- Ans**
- ☐ 1. Kuchipudi
  - ☐ 2. Kathak
  - ☒ 3. Bharatanatyam
  - ☐ 4. Odissi

**Q.19** The animal cells are arranged in two embryonic layer and one undifferentiated layer that is called \_\_\_\_\_.

- Ans**
- ☒ 1. mesoglea
  - ☐ 2. endoderm
  - ☐ 3. protoderm
  - ☐ 4. ectoderm

**Q.20** \_\_\_\_\_ is a type of carbonate sedimentary rock. It is mainly composed of the minerals calcite and aragonite.

- Ans**
- ☒ 1. Limestone
  - ☐ 2. Feldspar
  - ☐ 3. Marble
  - ☐ 4. Garnet

Section : Part-C-Elementary Mathematics

**Q.1** Evaluate:  $(-9) - (-60) \div (-12) + (-3) \times 6$

- Ans**
- ☐ 1. -35
  - ☐ 2. -34
  - ☒ 3. -32
  - ☐ 4. -31

**Q.2** The LCM of 46, 68, 136 and 138 is:

- Ans**
- ☐ 1. 9329
  - ☐ 2. 9455
  - ☒ 3. 9384
  - ☐ 4. 9406

**Q.3** If the cost price of 28 cricket bats is the same as the selling price of 32 cricket bats, then the loss percentage is:

- Ans**
- ☐ 1. 14.3%
  - ☐ 2. 32%
  - ☒ 3. 12.5%
  - ☐ 4. 28%

**Q.4** There are 44 members in group A, 26 members in group B and 45 members in group C. All the members of these groups went to a restaurant. The average amount spent on each member of group A, B and C is ₹403, ₹383 and ₹228, respectively. The total average amount (in ₹) spent per member is:

- Ans**
- ☒ 1. 330
  - ☐ 2. 334
  - ☐ 3. 329
  - ☐ 4. 327

**Q.5** Atul invests a sum of ₹5400 and Nirmal invests a sum of ₹10200 at the same rate of simple interest per annum. If, at the end of 5 years, Nirmal gets ₹480 more interest than Atul, then find the rate of interest per annum (in percentage).

- Ans**
- ☒ 1. 2
  - ☐ 2. 4
  - ☐ 3. 3
  - ☐ 4. 5

**Q.6** A cylindrical tank has a capacity of 4774 m<sup>3</sup>. If the radius of the base is 7 m, what is the depth?  
(Use  $\pi = \frac{22}{7}$ )

- Ans**
- ☐ 1. 32 m
  - ☐ 2. 33 m
  - ☐ 3. 30 m
  - ☒ 4. 31 m

**Q.7** 400 apples were bought at ₹1220 per hundred and were sold at a profit of ₹920. Find the selling price (in ₹) per dozen of apples.

- Ans**
- ☐ 1. 184
  - ☐ 2. 164
  - ☒ 3. 174
  - ☐ 4. 189

**Q.8** The price of fuel decreases by 15%, 25% and 35% in three successive months, but increases by 40% in the fourth month. What is the percentage increase/decrease in the price of fuel in the fourth month as compared to its original price?

- Ans**
- ☒ 1. Decreases by 41.98%
  - ☐ 2. Decreases by 40.3%
  - ☐ 3. Increases by 39.36%
  - ☐ 4. Increases by 45.33%

**Q.9** If 4% of x = 96, then x is equal to:

- Ans**
- ☐ 1. 4800
  - ☒ 2. 2400
  - ☐ 3. 4900
  - ☐ 4. 2500

**Q.10** LCM and HCF of two numbers are 198 and 33 respectively. If one of the numbers is 99, then find the other number.

- Ans**
- ☐ 1. 63
  - ☐ 2. 67
  - ☐ 3. 68
  - ☒ 4. 66

Q.11 Ashok has ₹1617 with him. He divided it amongst his sons Raj and Varun and asked them to invest it at 10% rate of interest compounded annually. It was seen that Raj and Varun got same amount after 18 and 19 years respectively. How much (in ₹) did Ashok give to Raj?

- Ans ☒ 1. 847  
☐ 2. 870  
☐ 3. 770  
☐ 4. 697

Q.12 In a medical store, the marked price of an injection is ₹6,490. The medical store owner gives a discount of 18% on its sale. What is the sale price (in ₹) of the injection? (Rounded off to the nearest rupee.)

- Ans ☐ 1. 5,112  
☐ 2. 5,421  
☒ 3. 5,322  
☐ 4. 5,233

Q.13 Find the value of  $\left[ (17 \times 16) \times \left\{ 8 \div 8 \times \frac{(18 - 11)}{7} \right\} \right]$

- Ans ☒ 1. 272  
☐ 2. 263  
☐ 3. 255  
☐ 4. 283

Q.14 The fourth proportional to 17, 87 and 119 is:

- Ans ☐ 1. 354  
☐ 2. 405  
☐ 3. 525  
☒ 4. 609

Q.15 Pramod has two grandsons Ashish and Ketan. 13 year old Ashish gets some money from Pramod's wealth and 14 year old Ketan gets rest of the money. But Ashish and Ketan will get money only when they turn 24 years old. Till then the money is in a bank getting interest at rate 4% compounded annually. When both turn 24, they receive the same amount. How much had Pramod given Ketan (in ₹) initially, if total money with Pramod was ₹25500?

- Ans ☐ 1. 12250  
☒ 2. 13000  
☐ 3. 13350  
☐ 4. 12500

Q.16 Two trains are moving in opposite directions at speeds of 60 km/h and 70 km/h. The length of one train is 170 m. The time taken by them to cross each other is 26 seconds. The length (in m) of the other train, correct to 2 decimal places, is:

- Ans ☒ 1. 768.88  
☐ 2. 770.75  
☐ 3. 771.56  
☐ 4. 769.34

Q.17 A and B can finish a work in 20 days while B and C can do it in 36 days. A started the work, worked for 5 days, then B worked for 10 days and the remaining work was finished by C in 15 days. In how many days could C alone have finished the whole work?

- Ans
- ☒ 1.  $16\frac{4}{11}$
  - ☐ 2.  $15\frac{8}{11}$
  - ☐ 3.  $16\frac{8}{11}$
  - ☐ 4.  $15\frac{4}{11}$

Q.18 A man travels at 50 km/hr for 2 hours, the next at 40 km/hr for 2.5 hours and the next at 60 km/hr for 3 hours. What is his average speed (in km/hr, rounded off to two decimal places) for the whole journey?

- Ans
- ☒ 1. 50.67
  - ☐ 2. 48.33
  - ☐ 3. 46.67
  - ☐ 4. 53.33

Q.19 A train travels the first 200 km of a journey at a speed of 100 km/h and the remaining 150 km at a speed of 75 km/h. What is the average speed (in km/h) of the train for the entire journey?

- Ans
- ☐ 1. 92.5
  - ☒ 2. 87.5
  - ☐ 3. 85
  - ☐ 4. 90

Q.20 The mean proportional between 36 and a number N is three times the mean proportional between 8 and 32. The number N is:

- Ans
- ☐ 1. 47
  - ☐ 2. 58
  - ☐ 3. 51
  - ☒ 4. 64

#### Section : Part-D-English

Q.1 In the sentence, 'She gave a succinct summary of the meeting', what is a synonym of the word 'succinct'?

- Ans
- ☐ 1. Detailed
  - ☒ 2. Brief
  - ☐ 3. Complicated
  - ☐ 4. Lengthy

Q.2 Select the most appropriate option to fill in the blank. Determine the collocation through the sentence.

When the commander gives an order, \_\_\_\_\_ obedience is expected of the soldiers.

- Ans
- ☐ 1. suddenly
  - ☒ 2. instant
  - ☐ 3. fastly
  - ☐ 4. hurry

**Q.3** Select the most appropriate idiom to substitute the underlined word segment in the given sentence.

Mr. Saxena sold his car because it was a useless one.

- Ans**
- ☐ 1. in doldrums
  - ☐ 2. a gift of gab
  - ☒ 3. a white elephant
  - ☐ 4. bite the bullet

**Q.4** Select the most appropriate synonym of the given word.

**Frantic**

- Ans**
- ☒ 1. Distraught
  - ☐ 2. Magnanimous
  - ☐ 3. Quaint
  - ☐ 4. Kinetic

**Q.5** Select the most appropriate meaning of the given word.

**Bright**

- Ans**
- ☐ 1. Immense
  - ☒ 2. Radiant
  - ☐ 3. Hooked
  - ☐ 4. Unlit

**Q.6** The following sentence has been divided into parts. One of them may contain an error. Select the part that contains the error from the given options. If you don't find any error, mark 'No error' as your answer.

She danced happy / on the stage / in the competition held last evening.

- Ans**
- ☐ 1. on the stage
  - ☒ 2. She danced happy
  - ☐ 3. in the competition held last evening
  - ☐ 4. No error

**Q.7** Select the most appropriate option to fill in the blanks.

His (1)\_\_\_\_ project featured modern technology, (2)\_\_\_\_ processes and practical solutions, impressing the panel of (3)\_\_\_\_ during the competition.

- Ans**
- ☐ 1. (1) innovative ; (2) judges ; (3) efficient
  - ☐ 2. (1)judges; (2)efficient; (3)innovative
  - ☐ 3. (1) efficient ; (2) judges ; (3) innovative
  - ☒ 4. (1) innovative ; (2) efficient (3) judges

**Q.8** Select the most appropriate option to fill in the blank.

Which route is \_\_\_\_\_ best for avoiding traffic?

- Ans**
- ☒ 1. the
  - ☐ 2. No article required
  - ☐ 3. a
  - ☐ 4. an

**Q.9** Select the option that correctly rectifies the underlined error in the given sentence.

Man has made many changes on earth with primitive tools and limited knowlege.

- Ans**
- ☒ 1. knowledge
  - ☐ 2. knowledege
  - ☐ 3. knowlage
  - ☐ 4. knowladge

**Q.10** Select the most appropriate option to fill in the blank.

The data from the latest studies \_\_\_\_\_ a sharp rise in global temperatures.

- Ans**
- ☐ 1. show
  - ☐ 2. are being show
  - ☐ 3. have been showing
  - ☒ 4. shows

**Q.11** Select the most appropriate idiom that refers to the underlined segment in the given sentence.

His father enjoyed the strongest position as an MLA in his constituency.

- Ans**
- ☐ 1. To be at hem of
  - ☐ 2. To go to the dogs
  - ☒ 3. To get upper hand
  - ☐ 4. To be at one's wit

**Q.12** Select the **INCORRECTLY** spelt word.

- Ans**
- ☒ 1. Deciet
  - ☐ 2. Anomaly
  - ☐ 3. Consistent
  - ☐ 4. Fright

**Q.13** Select the most appropriate **ANTONYM** of the underlined word in the given sentence.

Rutvika's boldness in tackling new challenges was really admirable.

- Ans**
- ☒ 1. Timidity
  - ☐ 2. Confidence
  - ☐ 3. Correctness
  - ☐ 4. Recklessness

**Q.14** Identify the sentence with the **INCORRECT** usage of adverb.

- Ans**
- ☐ 1. Larry had almost forgotten about the meeting.
  - ☐ 2. Lary had certainly forgotten about the meeting.
  - ☐ 3. Larry had completely forgotten about the meeting.
  - ☒ 4. Larry complete had forgotten about the meeting.

**Q.15** Select the most appropriate **ANTONYM** of the given word.

Exculpate

- Ans**
- ☐ 1. Condone
  - ☒ 2. Condemn
  - ☐ 3. Absolve
  - ☐ 4. Vindicate

**Comprehension:**

In the following passage, some words have been deleted. Read the passage carefully and select the most appropriate option to fill in each blank.

The last one of this long procession (1)\_\_\_\_\_ silent men and women was a little wizened old man. Even he (2)\_\_\_\_\_ a load of two baskets, slung on a pole on his shoulder. (3)\_\_\_\_\_ he kept a folded quilt and a cauldron. In the other basket, there seemed to be a quilt, (4)\_\_\_\_\_ ragged and patched, but still clean. There was no one with (5)\_\_\_\_\_.

**SubQuestion No : 16**

**Q.16** Select the most appropriate option to fill in blank no.1.

- Ans**
- ☐ 1. in
  - ☐ 2. to
  - ☐ 3. for
  - ☒ 4. of

**Comprehension:**

In the following passage, some words have been deleted. Read the passage carefully and select the most appropriate option to fill in each blank.

The last one of this long procession (1)\_\_\_\_\_ silent men and women was a little wizened old man. Even he (2)\_\_\_\_\_ a load of two baskets, slung on a pole on his shoulder. (3)\_\_\_\_\_ he kept a folded quilt and a cauldron. In the other basket, there seemed to be a quilt, (4)\_\_\_\_\_ ragged and patched, but still clean. There was no one with (5)\_\_\_\_\_.

**SubQuestion No : 17**

**Q.17** Select the most appropriate option to fill in blank no. 2.

- Ans**
- ☐ 1. carrying
  - ☒ 2. carried
  - ☐ 3. carries
  - ☐ 4. carry

**Comprehension:**

In the following passage, some words have been deleted. Read the passage carefully and select the most appropriate option to fill in each blank.

The last one of this long procession (1)\_\_\_\_\_ silent men and women was a little wizened old man. Even he (2)\_\_\_\_\_ a load of two baskets, slung on a pole on his shoulder. (3)\_\_\_\_\_ he kept a folded quilt and a cauldron. In the other basket, there seemed to be a quilt, (4)\_\_\_\_\_ ragged and patched, but still clean. There was no one with (5)\_\_\_\_\_.

**SubQuestion No : 18**

**Q.18** Select the most appropriate option to fill in blank no. 3.

- Ans**
- ☐ 1. That
  - ☐ 2. This
  - ☐ 3. Than
  - ☒ 4. There

**Comprehension:**

In the following passage, some words have been deleted. Read the passage carefully and select the most appropriate option to fill in each blank.

The last one of this long procession (1)\_\_\_\_\_ silent men and women was a little wizened old man. Even he (2)\_\_\_\_\_ a load of two baskets, slung on a pole on his shoulder. (3)\_\_\_\_\_ he kept a folded quilt and a cauldron. In the other basket, there seemed to be a quilt, (4)\_\_\_\_\_ ragged and patched, but still clean. There was no one with (5)\_\_\_\_\_.

**SubQuestion No : 19**

**Q.19** Select the most appropriate option to fill in blank no. 4.

- Ans**
- ☐ 1. frankly
  - ☒ 2. extremely
  - ☐ 3. eagerly
  - ☐ 4. abruptly



**Comprehension:**

In the following passage, some words have been deleted. Read the passage carefully and select the most appropriate option to fill in each blank.

The last one of this long procession (1)\_\_\_\_\_ silent men and women was a little wizened old man. Even he (2)\_\_\_\_\_ a load of two baskets, slung on a pole on his shoulder. (3)\_\_\_\_\_ he kept a folded quilt and a cauldron. In the other basket, there seemed to be a quilt, (4)\_\_\_\_\_ ragged and patched, but still clean. There was no one with (5)\_\_\_\_\_.

**SubQuestion No : 20**

**Q.20** Select the most appropriate option to fill in blank no. 5.

- Ans**
- ☒ 1. him
  - ☐ 2. her
  - ☐ 3. his
  - ☐ 4. its

**Section : Part-D-Hindi**

**Q.1** दिए गए वाक्य में शब्द या वाक्य खण्ड को बदलिए।

आपका स्टेशन तो पहले छूट गया।

- Ans**
- ☐ 1. आपका स्टेशन पहले ही छूट गया।
  - ☒ 2. आपका स्टेशन तो पीछे छूट गया।
  - ☐ 3. आपका स्टेशन तो छूट गया पहले ही।
  - ☐ 4. आपका स्टेशन आगे छूट गया।

**Q.2** निम्नलिखित वाक्य में रेखांकित पद के बदले कौन सा विकल्प उपयुक्त है?  
निराला को अभिनंदन ग्रंथ प्रदान किया गया।

- Ans**
- ☒ 1. भेंट किया गया
  - ☐ 2. उपहार किया गया
  - ☐ 3. दान की गई
  - ☐ 4. पुरस्कृत की गई

**Q.3** निम्नलिखित वाक्य की पूर्ति देशज शब्द से करें।

किसी भी व्यक्ति को \_\_\_\_\_ कहना अनुचित है।

- Ans**
- ☐ 1. सज्जन
  - ☐ 2. पूजनीय
  - ☒ 3. ढक्कन
  - ☐ 4. उदार

**Q.4** निम्नलिखित वाक्य में अशुद्ध शब्द है-

आंखों से आंसू निकल पड़ा।

- Ans**
- ☐ 1. निकल
  - ☒ 2. पड़ा
  - ☐ 3. आंखों
  - ☐ 4. आंसू

**Q.5** निम्न में से किस वाक्य में निश्चित संख्यावाचक विशेषण का अशुद्ध प्रयोग है-

- Ans**
- ☐ 1. आज प्रतियोगिता में पाँच बच्चों को पुरस्कार मिला।
  - ☐ 2. डॉक्टर के यहाँ मेरा पहला नम्बर है।
  - ☒ 3. मुझे कुछ लीटर दूध चाहिए।
  - ☐ 4. तुम चारों बैठकर खाना खा लो।

Q.6 निम्न में से 'पृथ्वी' का पर्यायवाची कौन सा नहीं है?

- Ans
- ☐ 1. वसुधा
  - ☐ 2. अचला
  - ☐ 3. धरा
  - ☒ 4. सुधा

Q.7 यदि उत्थान पतन है, तो अस्त क्या है?

- Ans
- ☐ 1. दिन
  - ☐ 2. रात्रि
  - ☒ 3. उदय
  - ☐ 4. सवेरा

Q.8 प्रायः सभी वृक्षों के नाम पुल्लिंग होते हैं, किन्तु निम्नलिखित में से किस वृक्ष का नाम अपवाद है? उचित विकल्प का चयन कीजिए-

- Ans
- ☒ 1. कचनार
  - ☐ 2. सागौन
  - ☐ 3. शीशम
  - ☐ 4. बरगद

Q.9 अंधे की लाठी मुहावरे के लिए उपयुक्त खण्ड है।

- Ans
- ☐ 1. मतलब की बात करना
  - ☐ 2. मूर्ख व्यक्ति
  - ☒ 3. एक मात्र सहारा
  - ☐ 4. बेइज्जत करना

Q.10 इनमें से किस वाक्य में त्रुटि नहीं है?

- Ans
- ☐ 1. छात्र अपना अपना कार्य करो।
  - ☒ 2. ये लोग कहाँ जा रहे हैं?
  - ☐ 3. मैं पढ़ा हूँ।
  - ☐ 4. ये क्या करना चाहता है।

Q.11 'कामायिनी उच्च कोटी का महाकाव्य है।'

उपरोक्त अशुद्ध वाक्य के शुद्ध रूप का चयन करें-

- Ans
- ☒ 1. कामायनी उच्च कोटी का महाकाव्य है।
  - ☐ 2. कामायनी उच्च कोटी का महाकाव्य है।
  - ☐ 3. कामायनी उच्च कोटी का महाकाव्य है।
  - ☐ 4. कामायिनी उच्च कोटी का महाकाव्य है।

Q.12 रेखांकित शब्द के विलोम से दिया गया वाक्य पूर्ण करें-

पूर्व की अपेक्षा \_\_\_\_\_ की संस्कृति अधिक उन्मुक्त है।

- Ans
- ☐ 1. दक्षिण
  - ☐ 2. अग्रिम
  - ☐ 3. उत्तर
  - ☒ 4. पश्चिम

Q.13 'आनंद' का पर्याय निम्न में से नहीं है-

- Ans
- ☒ 1. उल्लास
  - ☒ 2. मोद
  - ☒ 3. यन्त्रणा
  - ☒ 4. हर्ष

Q.14 निम्नलिखित में से सही युग्म नहीं है।

- Ans
- ☒ 1. बालटी-पुर्तगाली
  - ☒ 2. लीची-चीनी
  - ☒ 3. टाँग-फारसी
  - ☒ 4. टीम-अंग्रेजी

Q.15 इनमें से 'निषेध' का विलोम शब्द कौन-सा है?

- Ans
- ☒ 1. विधि
  - ☒ 2. स्वीकृत
  - ☒ 3. स्वीकार
  - ☒ 4. निश्चित

**Comprehension:**

निम्नलिखित गद्यांश में से कुछ शब्द हटा दिए गए हैं। दिए गए विकल्पों की सहायता से रिक्त स्थानों की पूर्ति कीजिए। प्रत्येक संख्या के लिए उपयुक्त विकल्प का चयन कीजिए-

1. \_\_\_\_\_ लोगों ने धोतियाँ एक-दूसरी से बाँधी और खूब खींच-2. \_\_\_\_\_ आजमा लिया कि गाँठें कड़ी हैं 3. \_\_\_\_\_ नहीं। अपनी ओर से कोई धोखे का काम न रखा। धोती के एक 4. \_\_\_\_\_ पर डंडा बाँधा और उसे कुएँ में डाल 5. \_\_\_\_\_।

**SubQuestion No : 16**

Q.16 रिक्त स्थान 1 की पूर्ति के लिए सर्वाधिक उपयुक्त विकल्प का चयन कीजिए।

- Ans
- ☒ 1. हम
  - ☒ 2. मैं
  - ☒ 3. हमारे
  - ☒ 4. मैंने

**Comprehension:**

निम्नलिखित गद्यांश में से कुछ शब्द हटा दिए गए हैं। दिए गए विकल्पों की सहायता से रिक्त स्थानों की पूर्ति कीजिए। प्रत्येक संख्या के लिए उपयुक्त विकल्प का चयन कीजिए-

1. \_\_\_\_\_ लोगों ने धोतियाँ एक-दूसरी से बाँधी और खूब खींच-2. \_\_\_\_\_ आजमा लिया कि गाँठें कड़ी हैं 3. \_\_\_\_\_ नहीं। अपनी ओर से कोई धोखे का काम न रखा। धोती के एक 4. \_\_\_\_\_ पर डंडा बाँधा और उसे कुएँ में डाल 5. \_\_\_\_\_।

**SubQuestion No : 17**

Q.17 रिक्त स्थान 2 की पूर्ति के लिए सर्वाधिक उपयुक्त विकल्प का चयन कीजिए।

- Ans
- ☒ 1. खींचकर
  - ☒ 2. काटकर
  - ☒ 3. हटाकर
  - ☒ 4. तोड़कर

**Comprehension:**

निम्नलिखित गद्यांश में से कुछ शब्द हटा दिए गए हैं। दिए गए विकल्पों की सहायता से रिक्त स्थानों की पूर्ति कीजिए। प्रत्येक संख्या के लिए उपयुक्त विकल्प का चयन कीजिए-

1. \_\_\_\_\_ लोगों ने धोतियाँ एक-दूसरी से बाँधी और खूब खींच-2. \_\_\_\_\_ आजमा लिया कि गाँठें कड़ी हैं 3. \_\_\_\_\_ नहीं। अपनी ओर से कोई धोखे का काम न रखा। धोती के एक 4. \_\_\_\_\_ पर डंडा बाँधा और उसे कुएँ में डाल 5. \_\_\_\_\_।

**SubQuestion No : 18**

**Q.18** रिक्त स्थान 3 की पूर्ति के लिए सर्वाधिक उपयुक्त विकल्प का चयन कीजिए।

- Ans**
- ☐ 1. तब
  - ☐ 2. तथा
  - ☒ 3. या
  - ☐ 4. फिर

**Comprehension:**

निम्नलिखित गद्यांश में से कुछ शब्द हटा दिए गए हैं। दिए गए विकल्पों की सहायता से रिक्त स्थानों की पूर्ति कीजिए। प्रत्येक संख्या के लिए उपयुक्त विकल्प का चयन कीजिए-

1. \_\_\_\_\_ लोगों ने धोतियाँ एक-दूसरी से बाँधी और खूब खींच-2. \_\_\_\_\_ आजमा लिया कि गाँठें कड़ी हैं 3. \_\_\_\_\_ नहीं। अपनी ओर से कोई धोखे का काम न रखा। धोती के एक 4. \_\_\_\_\_ पर डंडा बाँधा और उसे कुएँ में डाल 5. \_\_\_\_\_।

**SubQuestion No : 19**

**Q.19** रिक्त स्थान 4 की पूर्ति के लिए सर्वाधिक उपयुक्त विकल्प का चयन कीजिए।

- Ans**
- ☐ 1. हथे
  - ☐ 2. बीच
  - ☒ 3. सिरे
  - ☐ 4. सिर

**Comprehension:**

निम्नलिखित गद्यांश में से कुछ शब्द हटा दिए गए हैं। दिए गए विकल्पों की सहायता से रिक्त स्थानों की पूर्ति कीजिए। प्रत्येक संख्या के लिए उपयुक्त विकल्प का चयन कीजिए-

1. \_\_\_\_\_ लोगों ने धोतियाँ एक-दूसरी से बाँधी और खूब खींच-2. \_\_\_\_\_ आजमा लिया कि गाँठें कड़ी हैं 3. \_\_\_\_\_ नहीं। अपनी ओर से कोई धोखे का काम न रखा। धोती के एक 4. \_\_\_\_\_ पर डंडा बाँधा और उसे कुएँ में डाल 5. \_\_\_\_\_।

**SubQuestion No : 20**

**Q.20** रिक्त स्थान 5 की पूर्ति के लिए सर्वाधिक उपयुक्त विकल्प का चयन कीजिए।

- Ans**
- ☐ 1. लेगा
  - ☒ 2. दिया
  - ☐ 3. सका
  - ☐ 4. देना